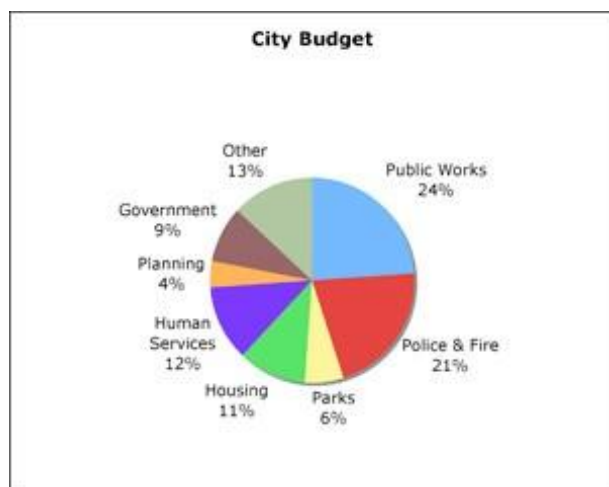
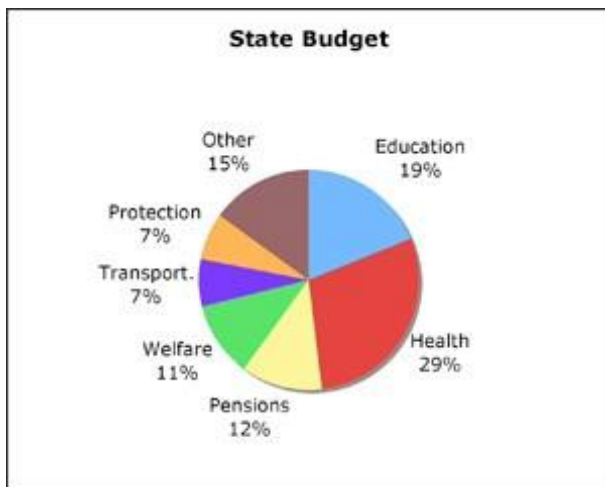
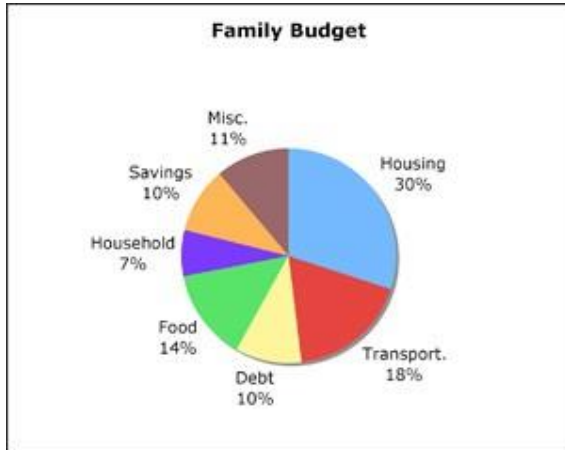


## Basic Math Vocabulary Quiz 6



1. What fraction of the budget did the state spend on pensions?
  - a. About  $\frac{1}{10}$
  - b. About  $\frac{1}{8}$
  - c. About  $\frac{1}{5}$
  
2. What fraction of the budget did the state spend on education?
  - a. Almost  $\frac{1}{3}$
  - b. Almost  $\frac{1}{4}$
  - c. Almost  $\frac{1}{5}$
  
3. How did spending on pensions compare with spending on welfare?
  - a. We spent about the same amount on welfare as on pensions
  - b. We spent about twice as much on welfare as on pensions
  - c. We spent about half as much on welfare as on pensions.
  
4. What fraction of the city budget was public works?
  - a. About  $\frac{1}{4}$
  - b. About  $\frac{1}{3}$
  - c. About  $\frac{1}{2}$
  
5. How much of the city budget goes to public works, police & fire, and parks combined?
  - a. About  $\frac{1}{4}$
  - b. About  $\frac{1}{3}$
  - c. About  $\frac{1}{2}$
  
6. How does spending on public works compare to spending on human services?
  - a. It's about the same as on human services.
  - b. It's twice as much as on human services.
  - c. It's half as much as on human services.



7. What fraction of the family budget is housing and transportation?
  - a. about half
  - b. about a quarter
  - c. about a third
  
8. How does spending on food compare to spending on housing?
  - a. It's about as much as on housing.
  - b. It's about twice as much as on housing.
  - c. It's about half as much as on housing.
  
9. How does spending on housing compare to savings?
  - a. It's double savings.
  - b. It's triple savings.
  - c. It's half of savings
  
10. How does spending on food compare to spending on household items?
  - a. It's triple spending on household items.
  - b. It's double spending on household items.
  - c. It's half spending on household items.

### Answers

1. c  
2. b  
3. a  
4. b  
5. c  
6. a  
7. c  
8. b  
9. a  
10. b